

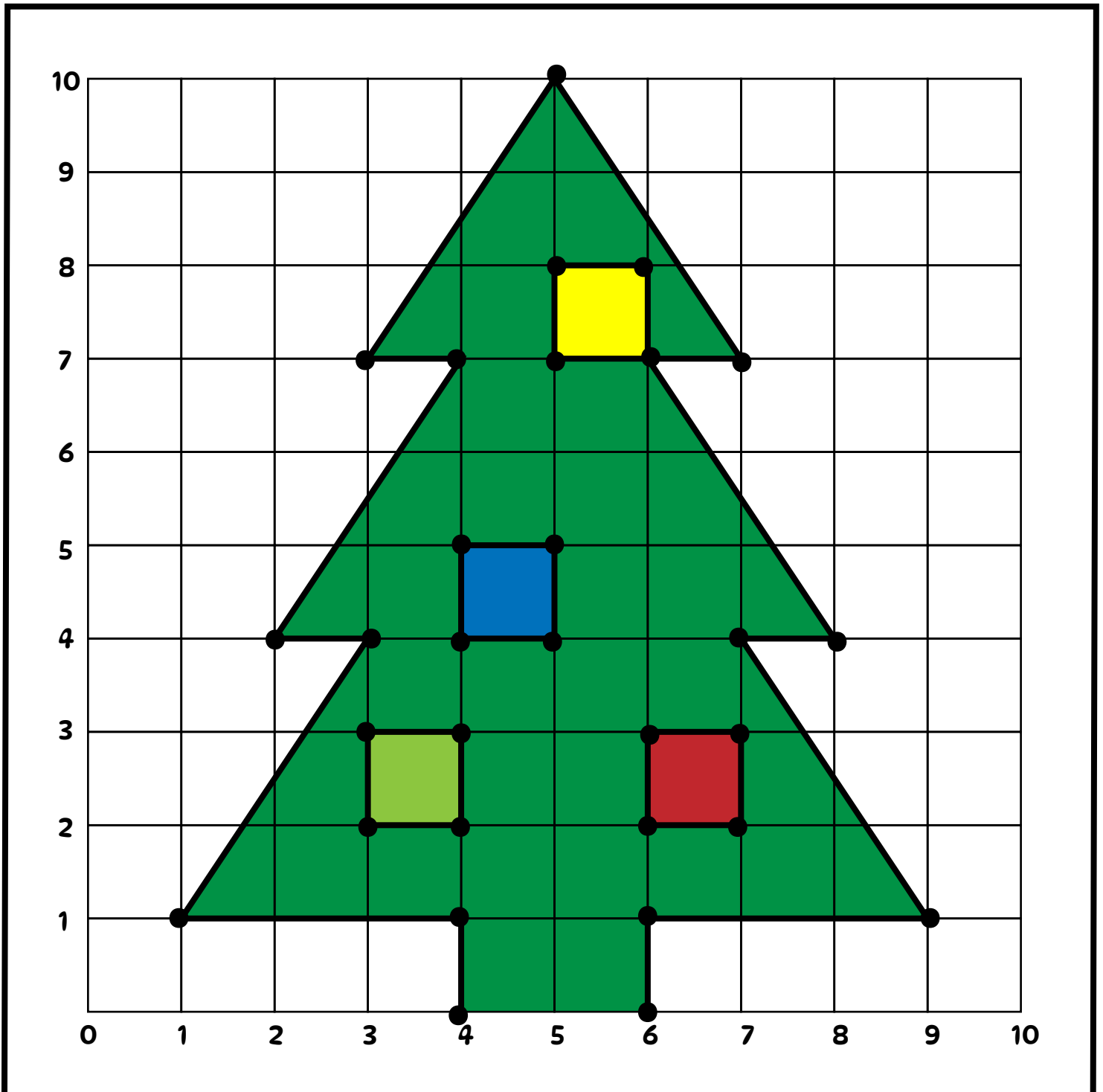
Name: _____

Christmas Coordinate Graphing

Directions: Plot the points below to reveal the image.

A:
(6,0) (6,7) (3,4)
(6,1) (7,7) (1,1)
(9,1) (3,7) (4,1)
(7,4) (4,7) (4,0)
(8,4) (2,4)

B:
(6,2) (3,2) (4,4) (5,7)
(7,2) (4,2) (5,4) (6,7)
(7,3) (4,3) (5,5) (6,8)
(6,3) (3,3) (4,5) (5,8)
(6,2) (3,2) (4,4) (5,7)



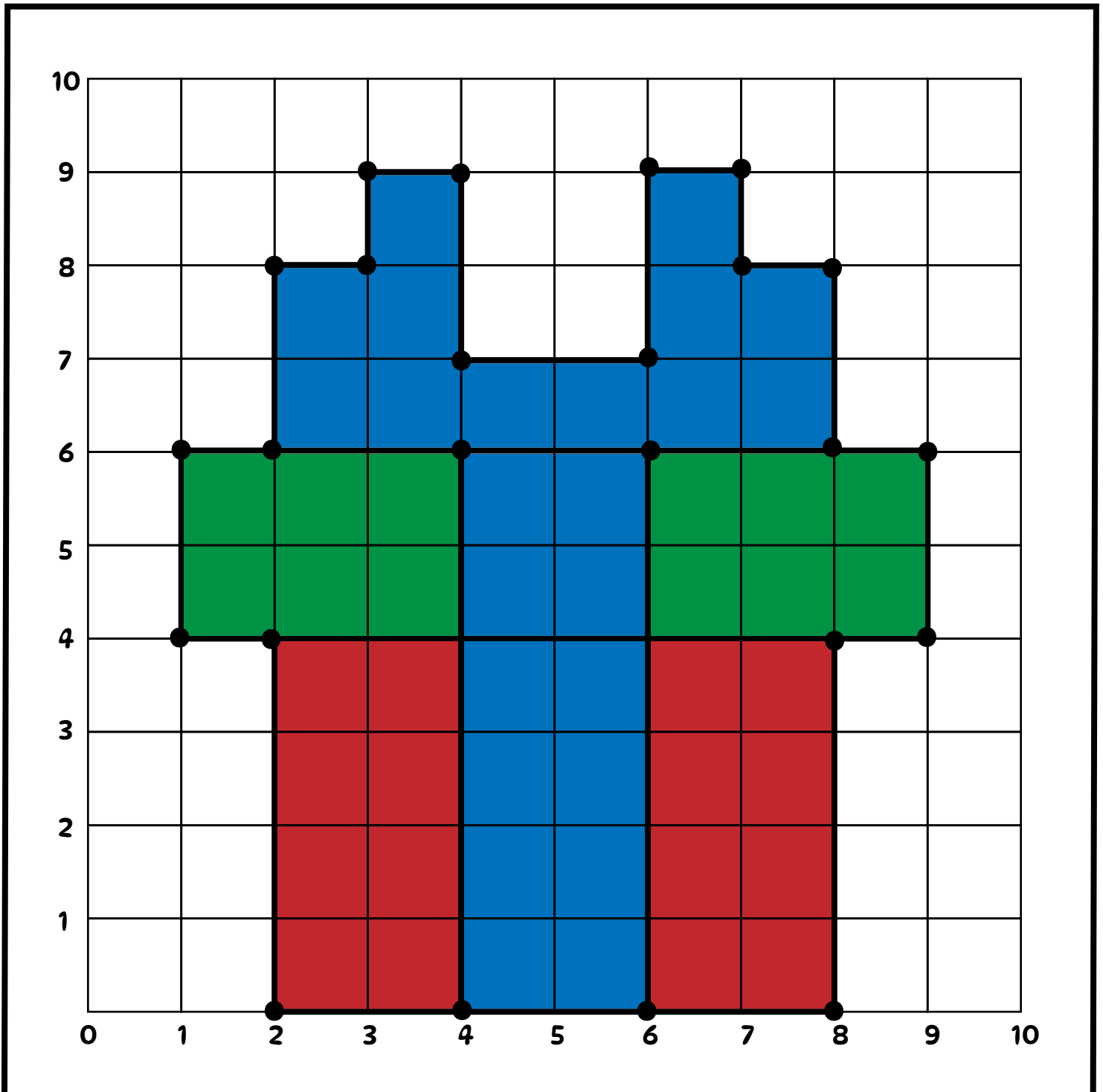
Name: _____

Christmas Coordinate Graphing

Directions: Plot the points below to reveal the image.

A:
(2,0) (1,6) (8,4)
(8,0) (1,4)
(8,4) (2,4)
(9,4) (2,0)
(9,6) (2,4)

B:
(4,0) (7,8) (4,9) (4,6)
(6,0) (7,9) (3,9) (4,0)
(6,6) (6,9) (3,8)
(8,6) (6,7) (2,8)
(8,8) (4,7) (2,6)

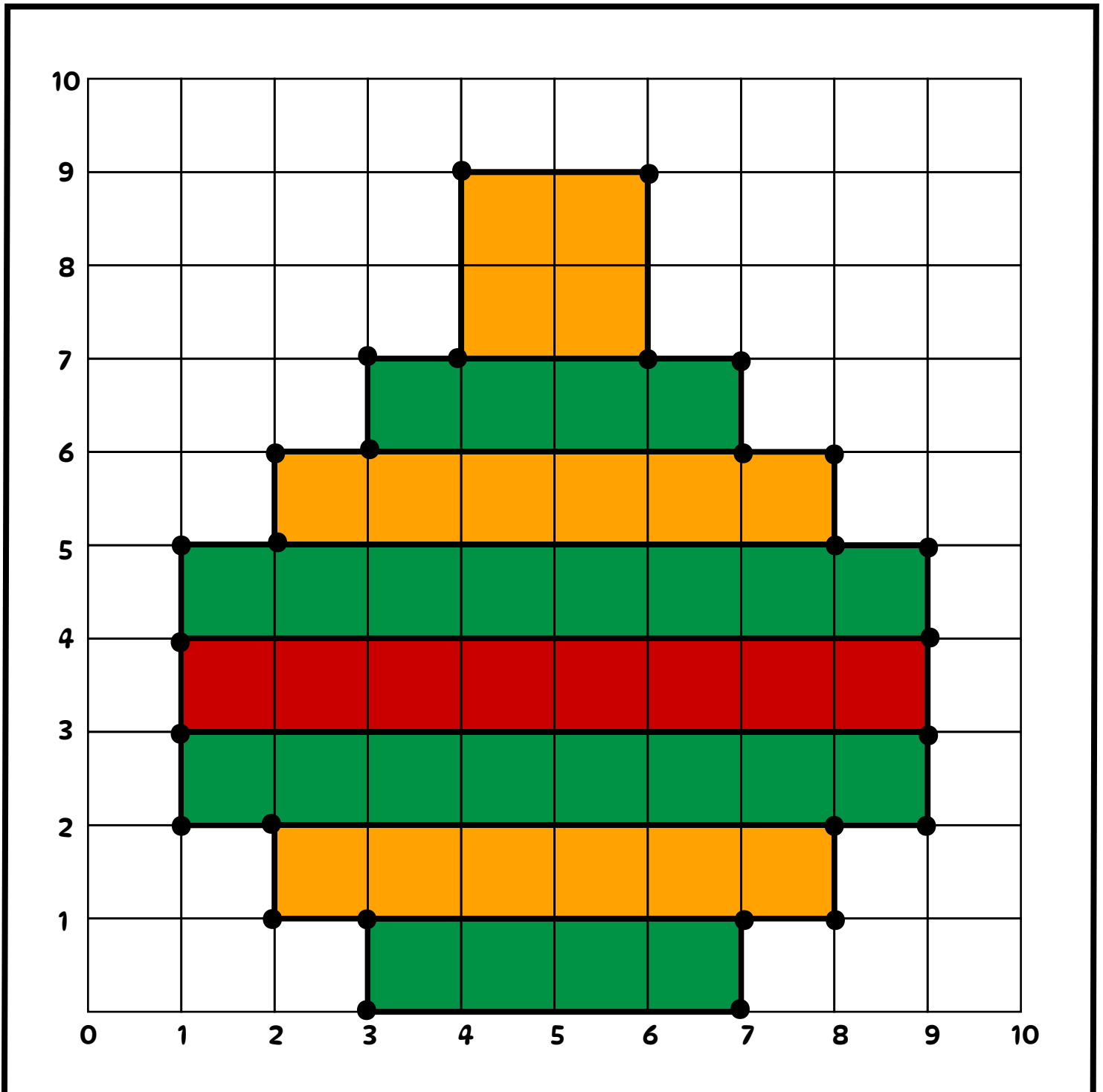


Name: _____

Christmas Coordinate Graphing

Directions: Plot the points below to reveal the image.

A:	(3,0)	(9,2)	(7,7)	(3,7)	(1,2)	B:	(3,1)	(9,3)	(7,6)
	(7,0)	(9,5)	(6,7)	(3,6)	(2,2)		(7,1)	(1,4)	(4,7)
	(7,1)	(8,5)	(6,9)	(2,6)	(2,1)		(2,2)	(9,4)	(6,7)
	(8,1)	(8,6)	(4,9)	(2,5)	(3,1)		(8,2)	(2,5)	
	(8,2)	(7,6)	(4,7)	(1,5)	(3,0)		(1,3)	(3,6)	



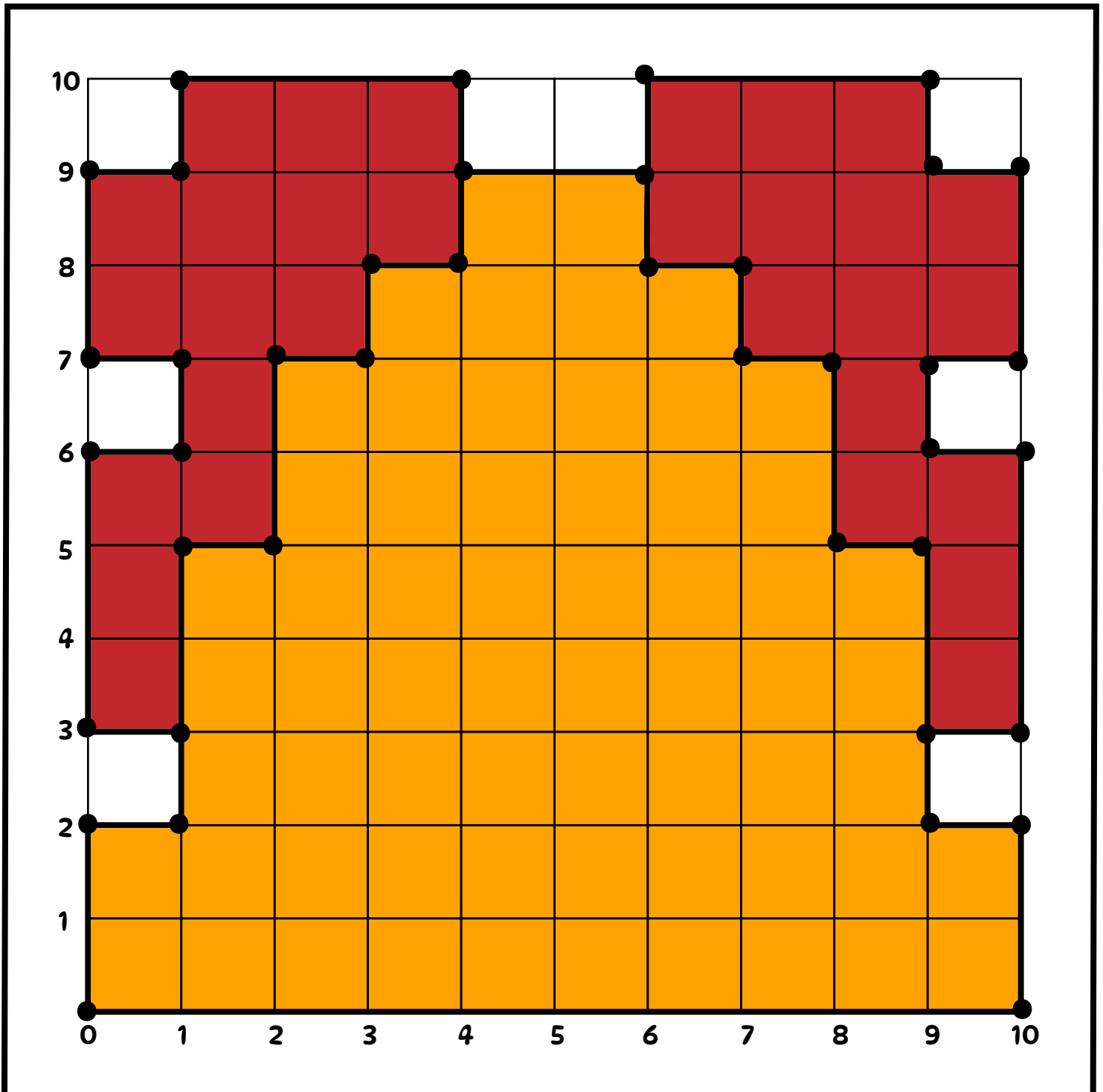
Name: _____

Christmas Coordinate Graphing

Directions: Plot the points below to reveal the image.

A: (0,0) (8,5) (6,9) (2,7) (0,0)
(10,0) (8,7) (4,9) (2,5)
(10,2) (7,7) (4,8) (1,5)
(9,2) (7,8) (3,8) (1,2)
(9,5) (6,8) (3,7) (0,2)

B: (9,3) (10,7) (6,9) (0,9) (0,3)
(10,3) (10,9) (4,9) (0,7) (1,3)
(10,6) (9,9) (4,10) (1,7)
(9,6) (9,10) (1,10) (1,6)
(9,7) (6,10) (1,9) (0,6)

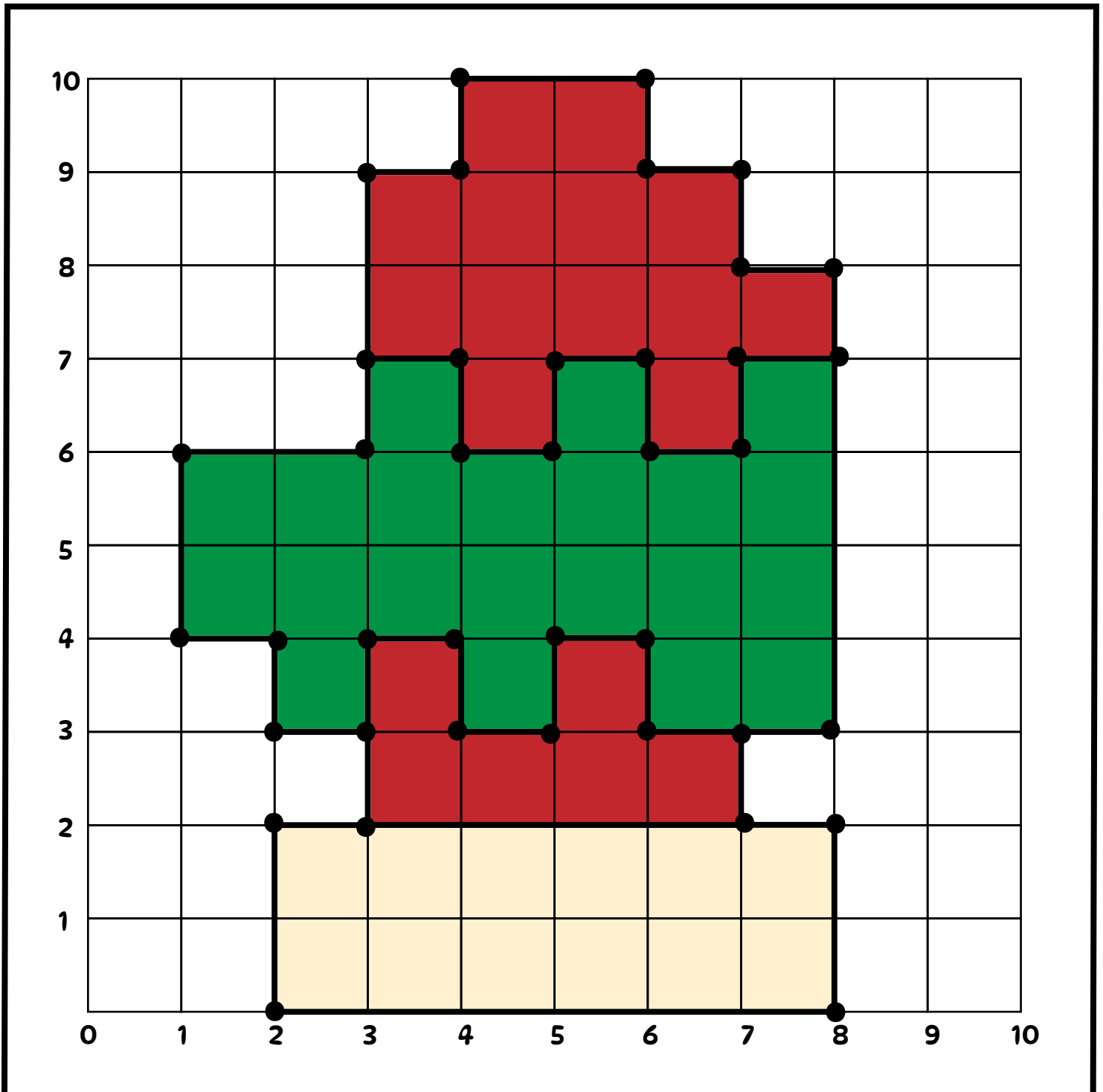


Name: _____

Christmas Coordinate Graphing

Directions: Plot the points below to reveal the image.

A:	(2,0)	(8,3)	(4,10)	(1,4)	(2,2)	B:	(3,2)	(4,3)	(7,3)	(5,7)	(8,7)
	(8,0)	(8,8)	(4,9)	(2,4)	(2,0)		(7,2)	(5,3)	(3,7)	(6,7)	
	(8,2)	(7,8)	(3,9)	(2,3)			(3,3)	(5,4)	(4,7)	(6,6)	
	(7,2)	(7,9)	(3,6)	(3,3)			(3,4)	(6,4)	(4,6)	(7,6)	
	(7,3)	(6,10)	(1,6)	(3,2)			(4,4)	(6,3)	(5,6)	(7,7)	

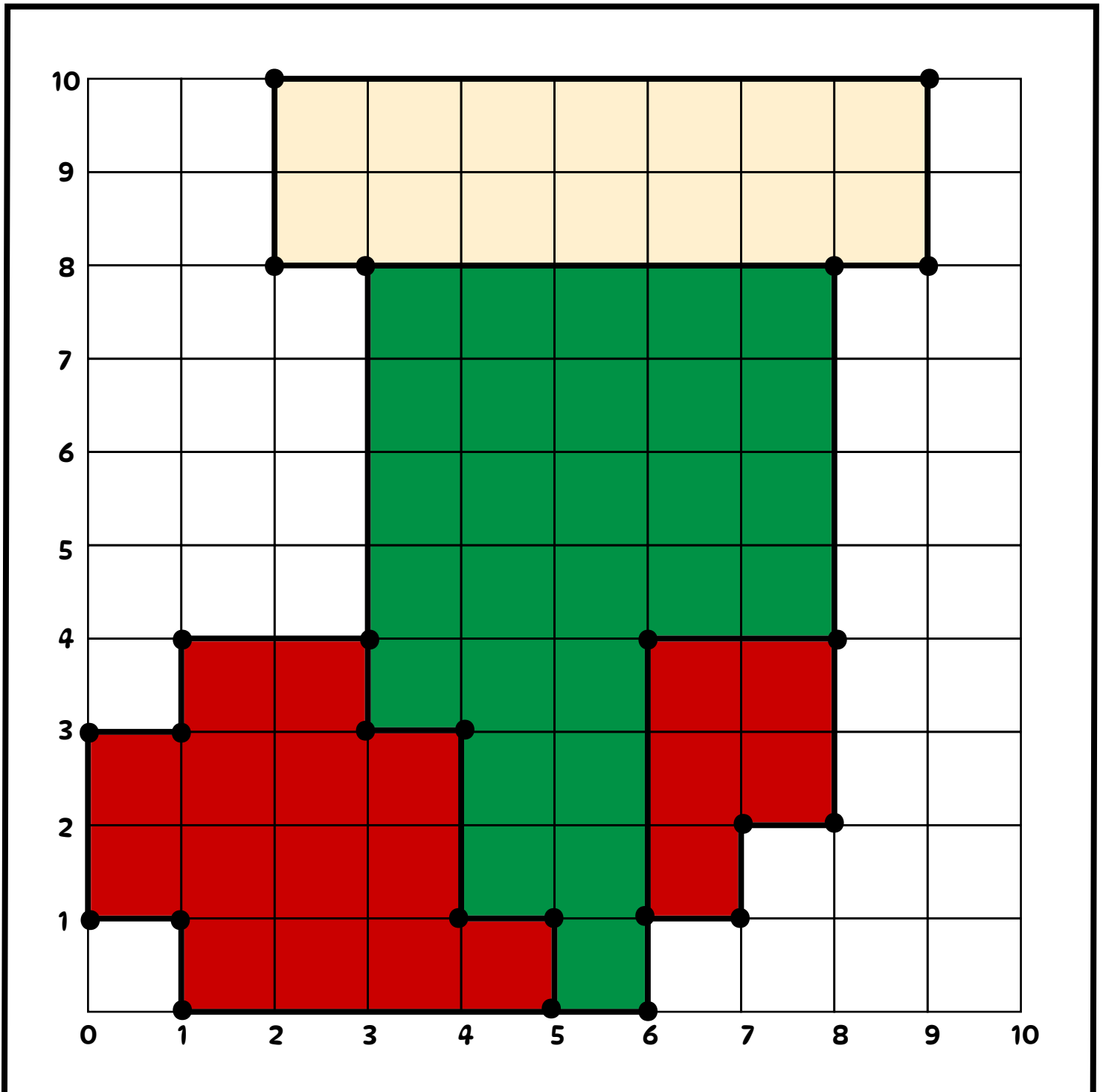


Name: _____

Christmas Coordinate Graphing

Directions: Plot the points below to reveal the image.

A:	(1,0)	(8,2)	(2,8)	(0,3)	B:	(5,0)	(3,4)	(8,8)
	(6,0)	(8,8)	(3,8)	(0,1)		(5,1)	(6,1)	
	(6,1)	(9,8)	(3,4)	(1,1)		(4,1)	(6,4)	
	(7,1)	(9,10)	(1,4)	(1,0)		(4,3)	(8,4)	
	(7,2)	(2,10)	(1,3)			(3,3)	(3,8)	



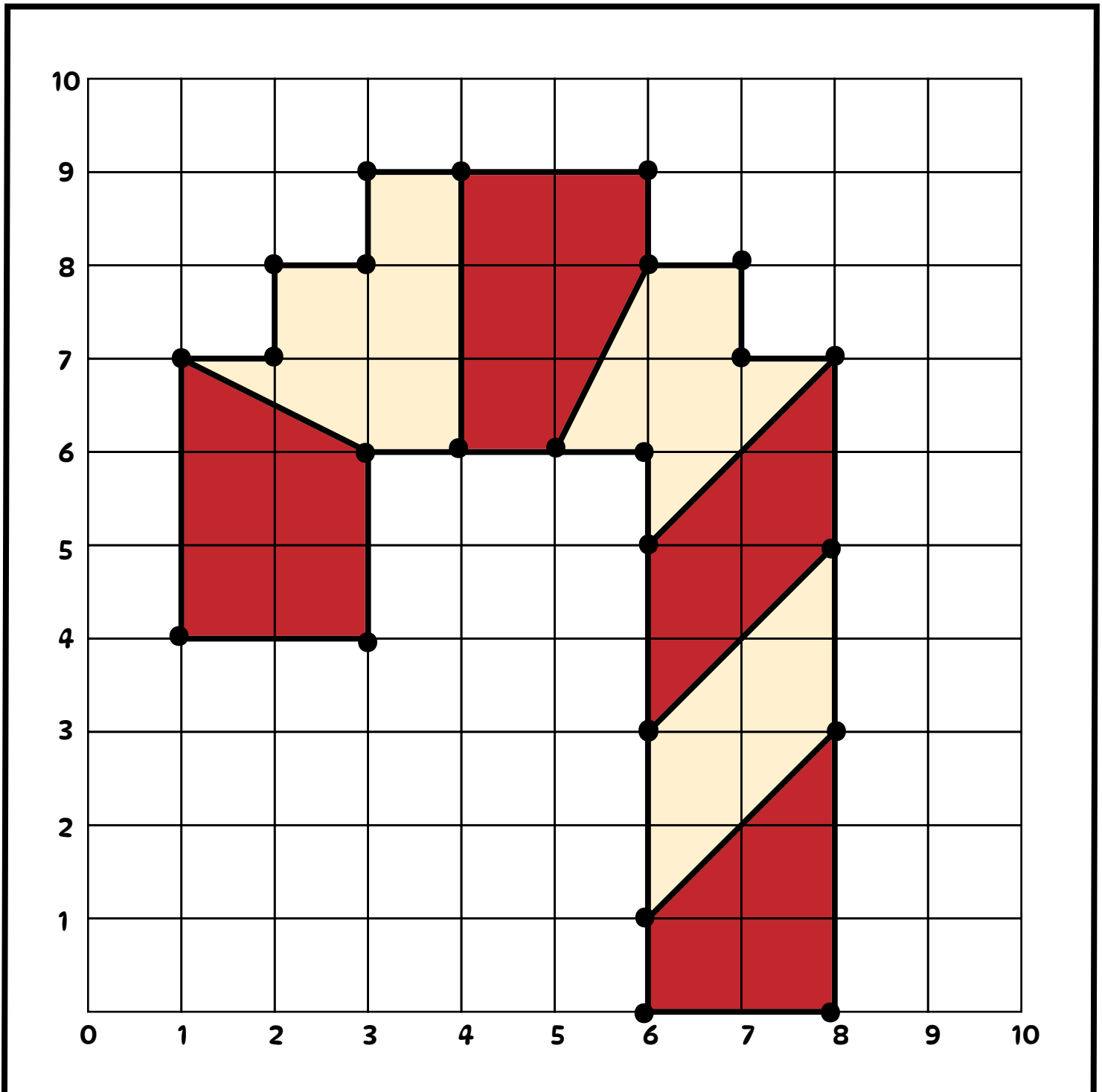
Name: _____

Christmas Coordinate Graphing

Directions: Plot the points below to reveal the image.

A:
(6,0) (6,8) (2,7) (6,6)
(8,0) (6,9) (1,7) (6,0)
(8,7) (3,9) (1,4)
(7,7) (3,8) (3,4)
(7,8) (2,8) (3,6)

B:
(6,1),(8,3) (3,6),(1,7)
(6,3),(8,5)
(6,5),(8,7)
(5,6),(6,8)
(4,6),(4,9)

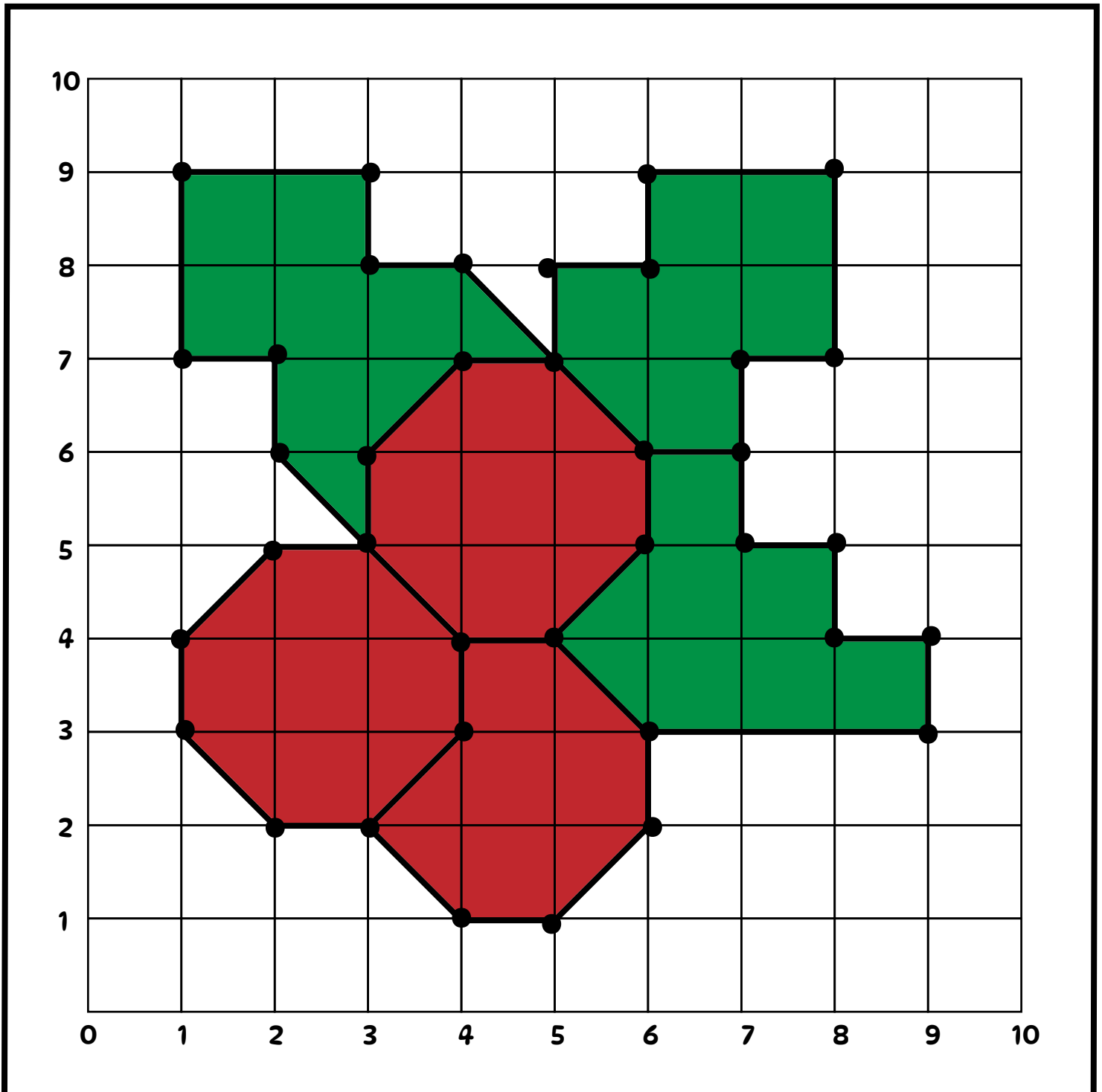


Name: _____

Christmas Coordinate Graphing

Directions: Plot the points below to reveal the image.

- | | | | | | | | | | | | |
|----|-------------|----|-------------|----|-------------|----|-------------|----|-------------|----|-------------|
| A: | (2,2) (2,5) | B: | (3,2) (5,4) | C: | (5,4) (3,6) | D: | (6,3) (7,5) | E: | (7,6) (6,8) | F: | (5,7) (1,7) |
| | (3,2) (1,4) | | (4,1) (4,4) | | (6,5) (3,5) | | (9,3) (7,6) | | (7,7) (5,8) | | (4,8) (2,7) |
| | (4,3) (1,3) | | (5,1) | | (6,6) | | (9,4) (6,6) | | (8,7) (5,7) | | (3,8) (2,6) |
| | (4,4) (2,2) | | (6,2) | | (5,7) | | (8,4) | | (8,9) | | (3,9) (3,5) |
| | (3,5) | | (6,3) | | (4,7) | | (8,5) | | (6,9) | | (1,9) |



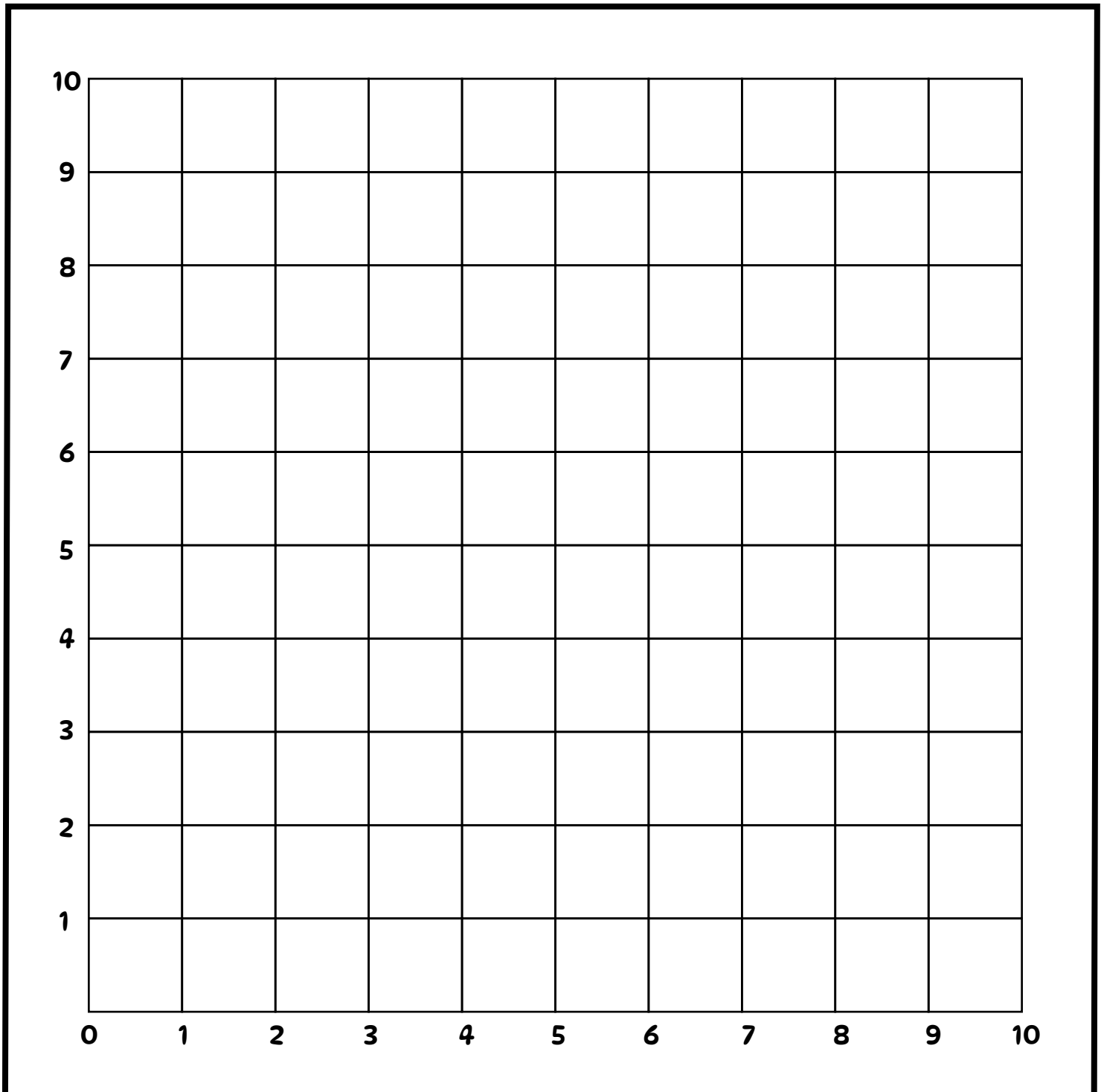
Name: _____

Christmas Coordinate Graphing

Directions: Plot the points below to reveal the image.

A:
(6,0) (6,7) (3,4)
(6,1) (7,7) (1,1)
(9,1) (3,7) (4,1)
(7,4) (4,7) (4,0)
(8,4) (2,4)

B:
(6,2) (3,2) (4,4) (5,7)
(7,2) (4,2) (5,4) (6,7)
(7,3) (4,3) (5,5) (6,8)
(6,3) (3,3) (4,5) (5,8)
(6,2) (3,2) (4,4) (5,7)



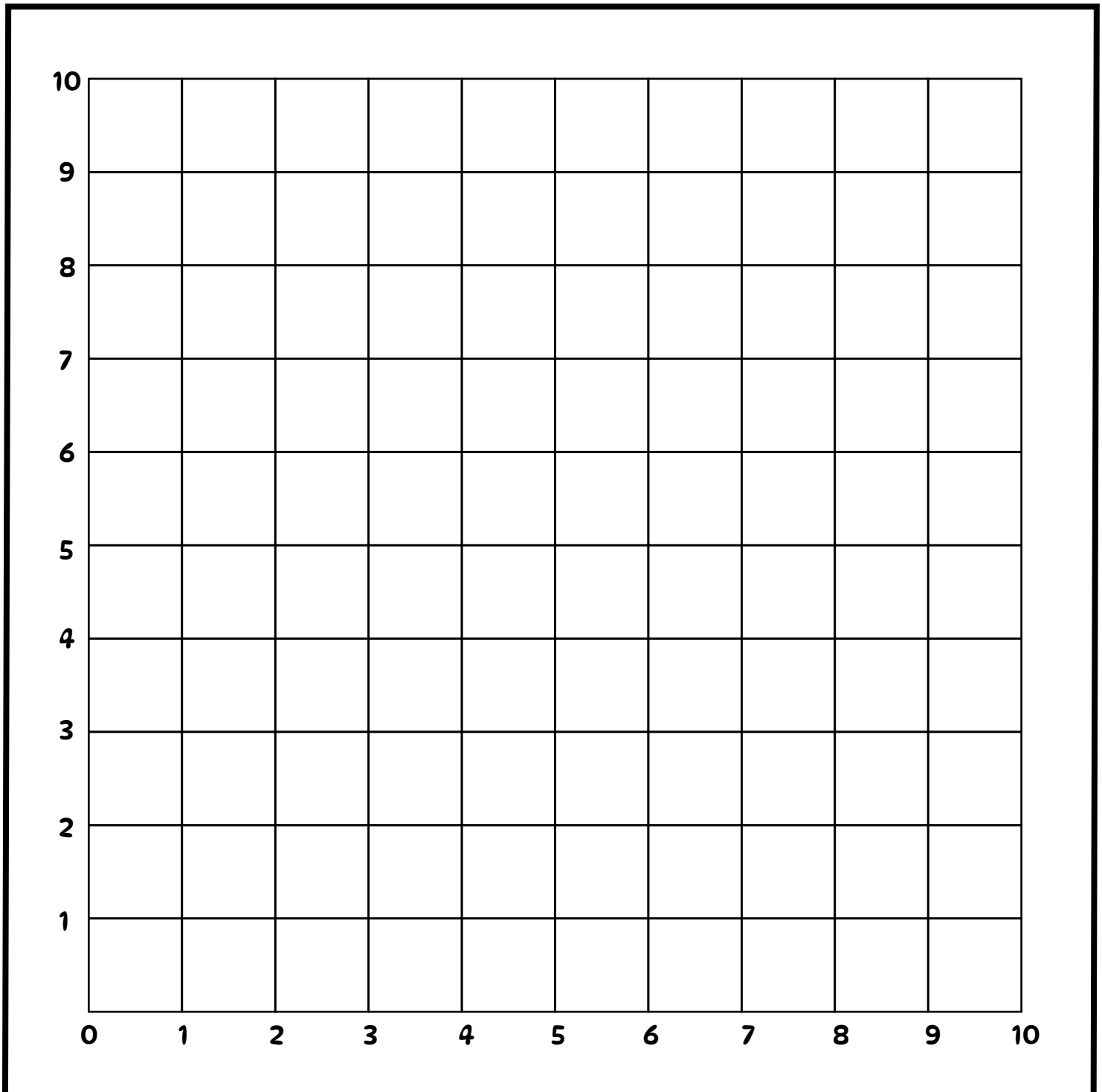
Name: _____

Christmas Coordinate Graphing

Directions: Plot the points below to reveal the image.

A:
(2,0) (1,6) (8,4)
(8,0) (1,4)
(8,4) (2,4)
(9,4) (2,0)
(9,6) (2,4)

B:
(4,0) (7,8) (4,9) (4,6)
(6,0) (7,9) (3,9) (4,0)
(6,6) (6,9) (3,8)
(8,6) (6,7) (2,8)
(8,8) (4,7) (2,6)

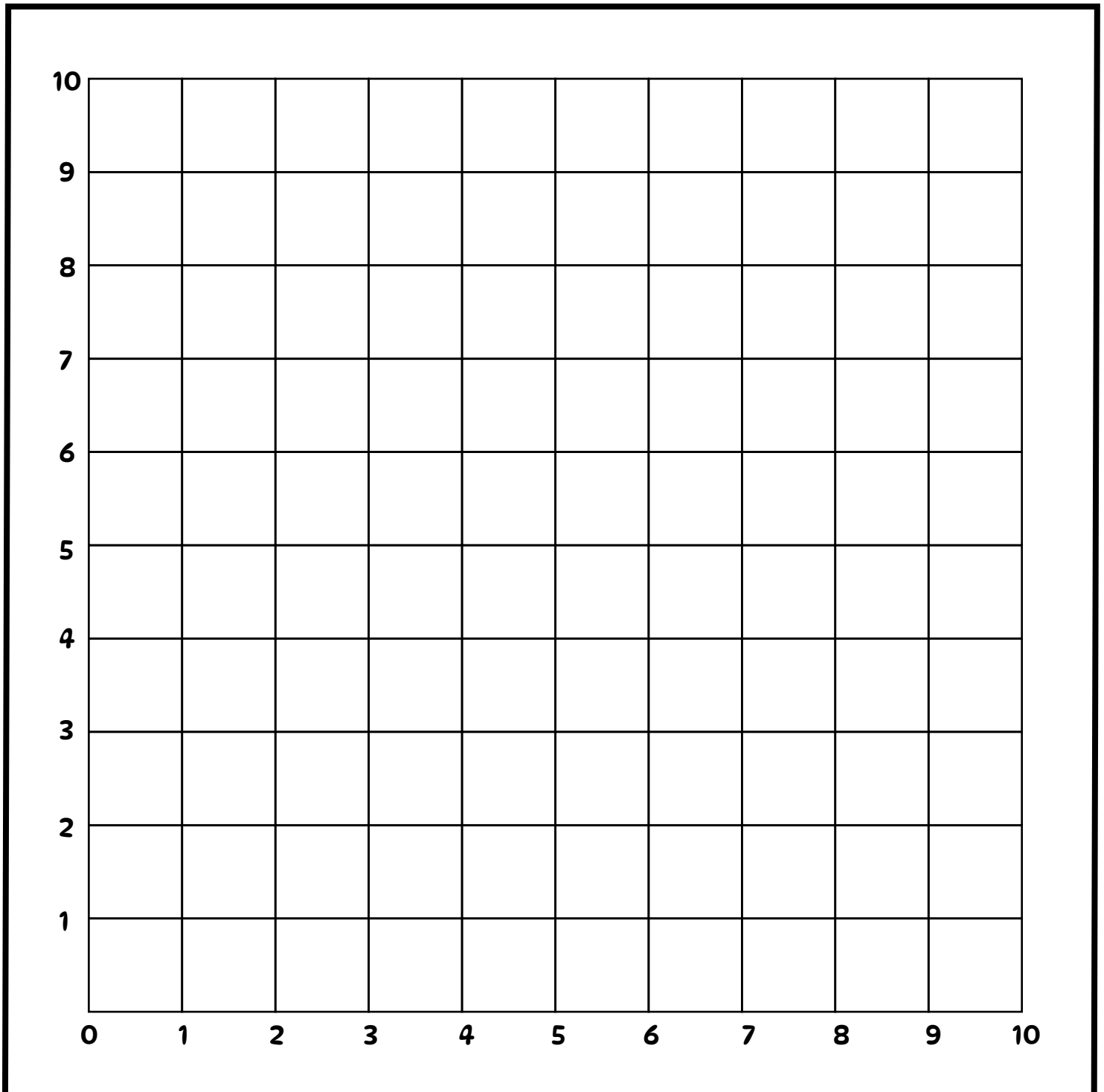


Name: _____

Christmas Coordinate Graphing

Directions: Plot the points below to reveal the image.

A:	(3,0)	(9,2)	(7,7)	(3,7)	(1,2)	B:	(3,1)	(9,3)	(7,6)
	(7,0)	(9,5)	(6,7)	(3,6)	(2,2)		(7,1)	(1,4)	(4,7)
	(7,1)	(8,5)	(6,9)	(2,6)	(2,1)		(2,2)	(9,4)	(6,7)
	(8,1)	(8,6)	(4,9)	(2,5)	(3,1)		(8,2)	(2,5)	
	(8,2)	(7,6)	(4,7)	(1,5)	(3,0)		(1,3)	(3,6)	



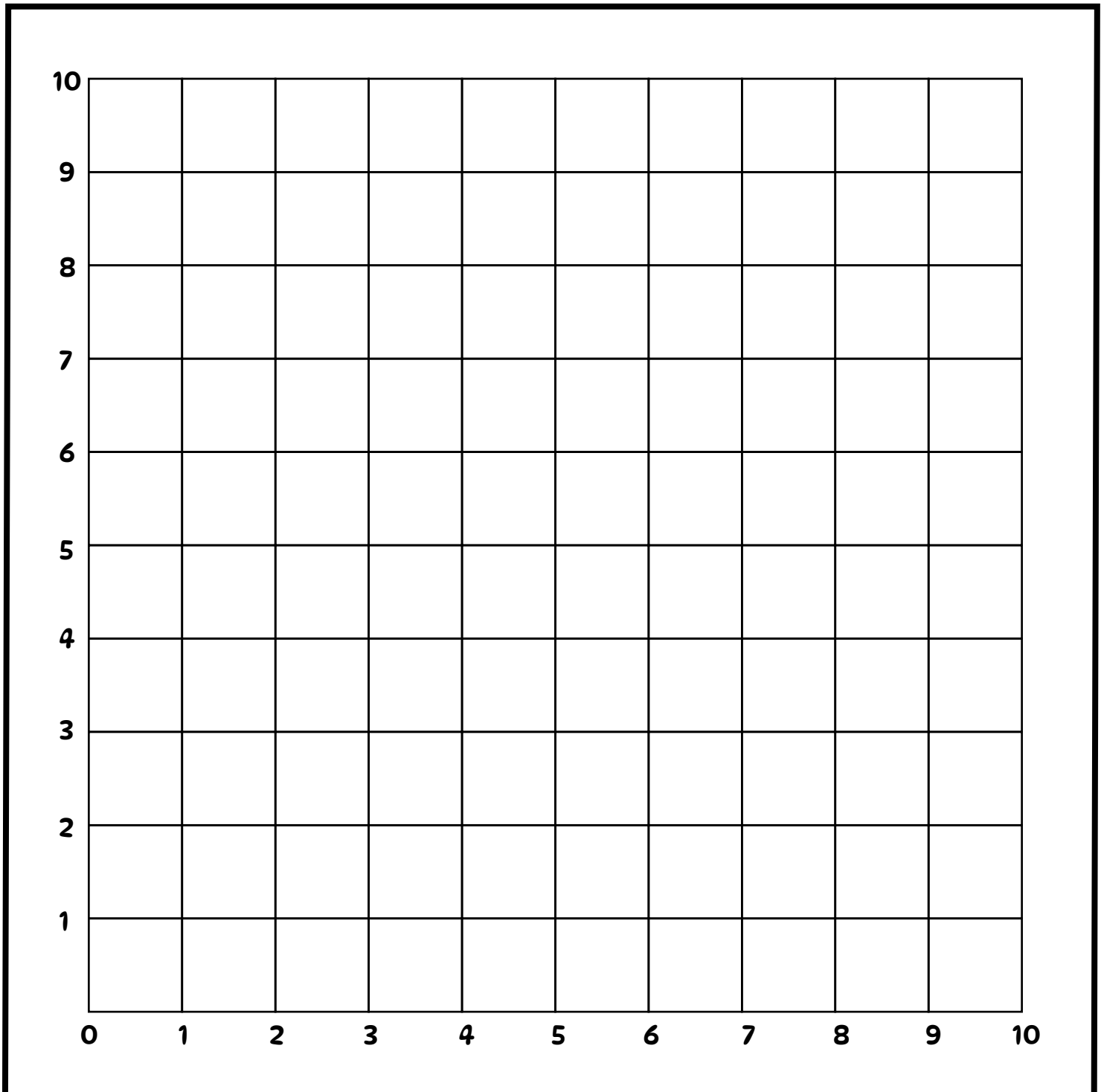
Name: _____

Christmas Coordinate Graphing

Directions: Plot the points below to reveal the image.

A:
(0,0) (8,5) (6,9) (2,7) (0,0)
(10,0) (8,7) (4,9) (2,5)
(10,2) (7,7) (4,8) (1,5)
(9,2) (7,8) (3,8) (1,2)
(9,5) (6,8) (3,7) (0,2)

B:
(9,3) (10,7) (6,9) (0,9) (0,3)
(10,3) (10,9) (4,9) (0,7) (1,3)
(10,6) (9,9) (4,10) (1,7)
(9,6) (9,10) (1,10) (1,6)
(9,7) (6,10) (1,9) (0,6)



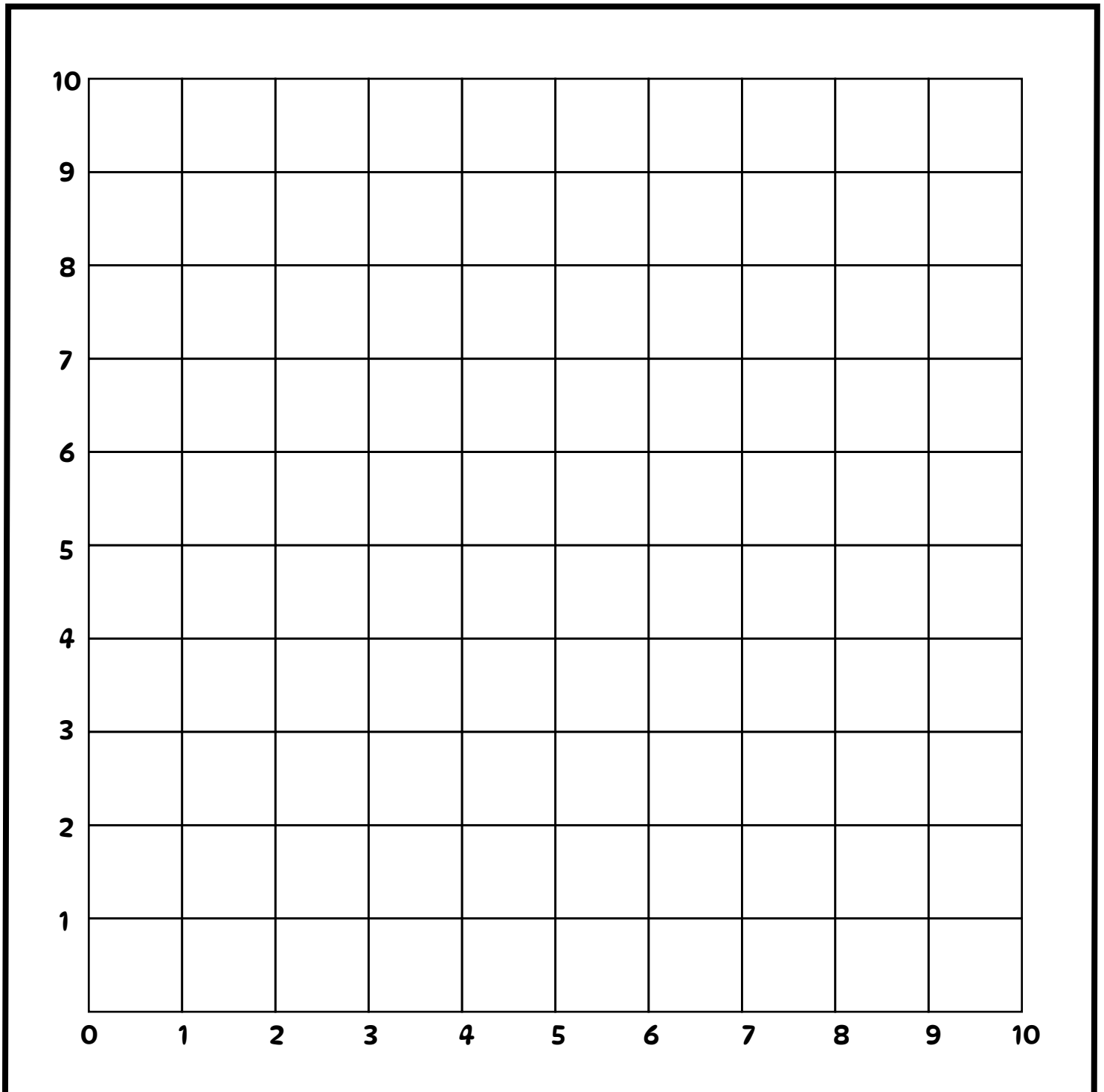
Name: _____

Christmas Coordinate Graphing

Directions: Plot the points below to reveal the image.

A: (2,0) (8,3) (4,10) (1,4) (2,2) (8,0) (8,8) (4,9) (2,4) (2,0) (8,2) (7,8) (3,9) (2,3) (7,2) (7,9) (3,6) (3,3) (7,3) (6,10) (1,6) (3,2)

B: (3,2) (4,3) (7,3) (5,7) (8,7) (7,2) (5,3) (3,7) (6,7) (3,3) (5,4) (4,7) (6,6) (3,4) (6,4) (4,6) (7,6) (4,4) (6,3) (5,6) (7,7)

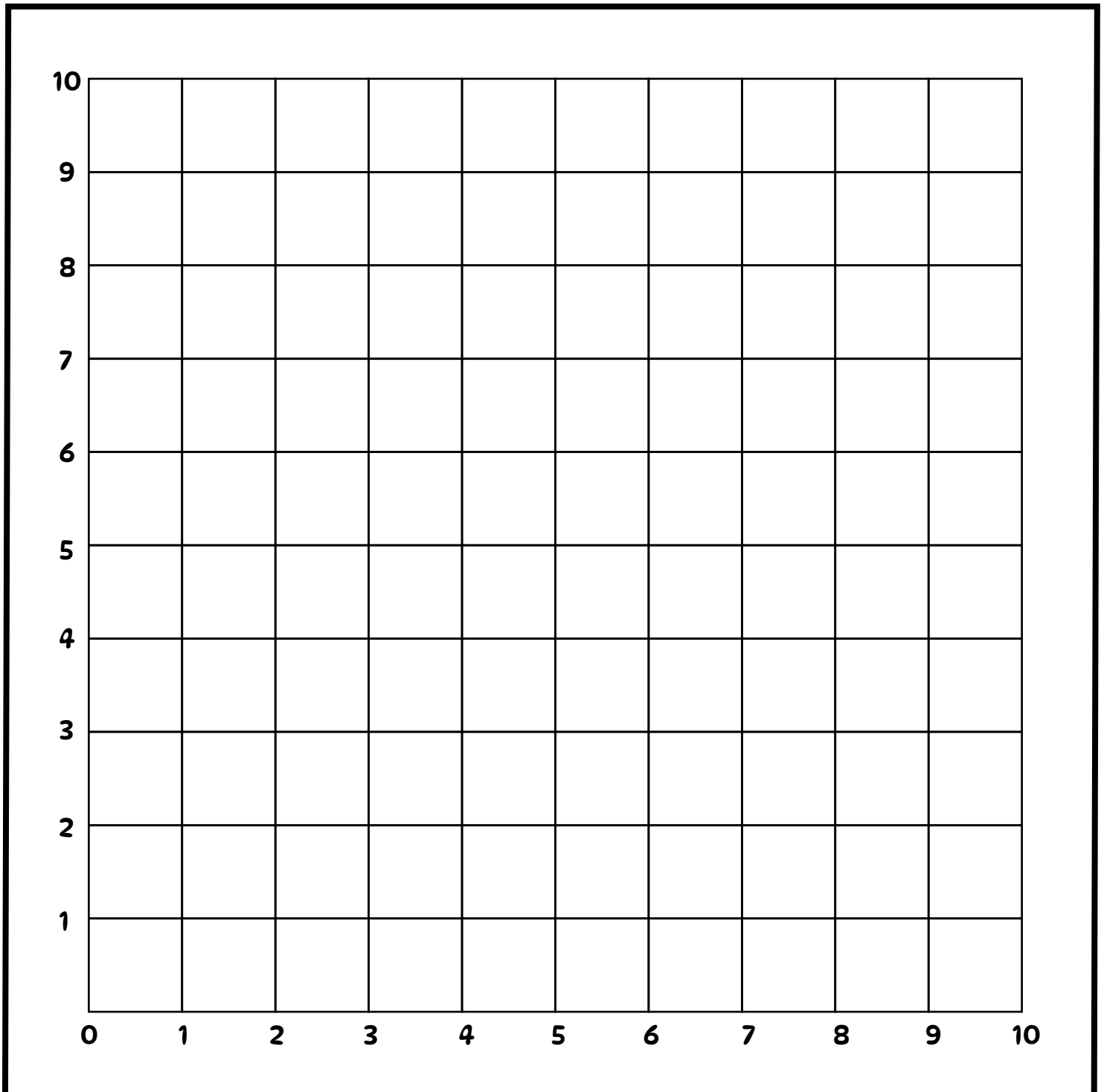


Name: _____

Christmas Coordinate Graphing

Directions: Plot the points below to reveal the image.

A:	(1,0)	(8,2)	(2,8)	(0,3)	B:	(5,0)	(3,4)	(8,8)
	(6,0)	(8,8)	(3,8)	(0,1)		(5,1)	(6,1)	
	(6,1)	(9,8)	(3,4)	(1,1)		(4,1)	(6,4)	
	(7,1)	(9,10)	(1,4)	(1,0)		(4,3)	(8,4)	
	(7,2)	(2,10)	(1,3)			(3,3)	(3,8)	



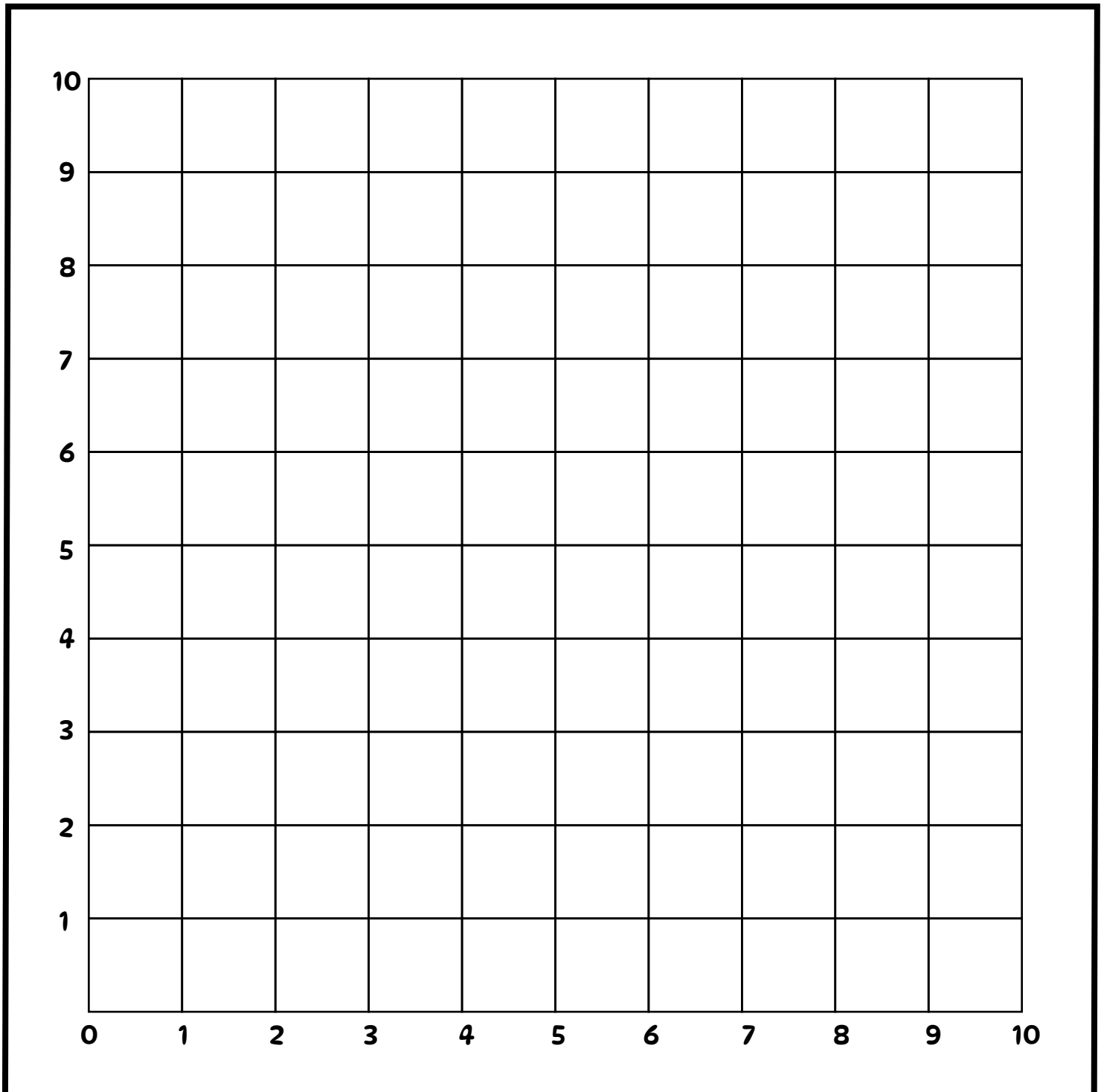
Name: _____

Christmas Coordinate Graphing

Directions: Plot the points below to reveal the image.

A: (6,0) (6,8) (2,7) (6,6)
(8,0) (6,9) (1,7) (6,0)
(8,7) (3,9) (1,4)
(7,7) (3,8) (3,4)
(7,8) (2,8) (3,6)

B: (6,1),(8,3) (3,6),(1,7)
(6,3),(8,5)
(6,5),(8,7)
(5,6),(6,8)
(4,6),(4,9)



Name: _____

Christmas Coordinate Graphing

Directions: Plot the points below to reveal the image.

A:	(2,2) (2,5)	B:	(3,2) (5,4)	C:	(5,4) (3,6)	D:	(6,3) (7,5)	E:	(7,6) (6,8)	F:	(5,7) (1,7)
	(3,2) (1,4)		(4,1) (4,4)		(6,5) (3,5)		(9,3) (7,6)		(7,7) (5,8)		(4,8) (2,7)
	(4,3) (1,3)		(5,1)		(6,6)		(9,4) (6,6)		(8,7) (5,7)		(3,8) (2,6)
	(4,4) (2,2)		(6,2)		(5,7)		(8,4)		(8,9)		(3,9) (3,5)
	(3,5)		(6,3)		(4,7)		(8,5)		(6,9)		(1,9)

